

Cambridge
International
AS & A Level

Cambridge International Examinations
Cambridge International Advanced Subsidiary and Advanced Level

GEOGRAPHY

9696/13

Paper 1 Core Geography

October/November 2017

INSERT

3 hours

READ THESE INSTRUCTIONS FIRST

This Insert contains all the Figures and the Table referred to in the questions.



This document consists of **7** printed pages and **1** blank page.



2

Fig. 1 for Question 1

Two storm hydrographs

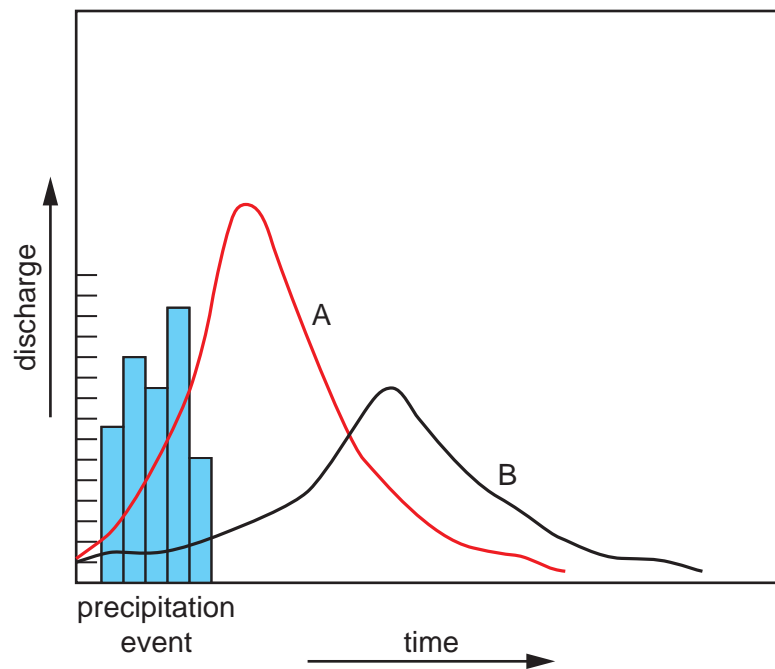
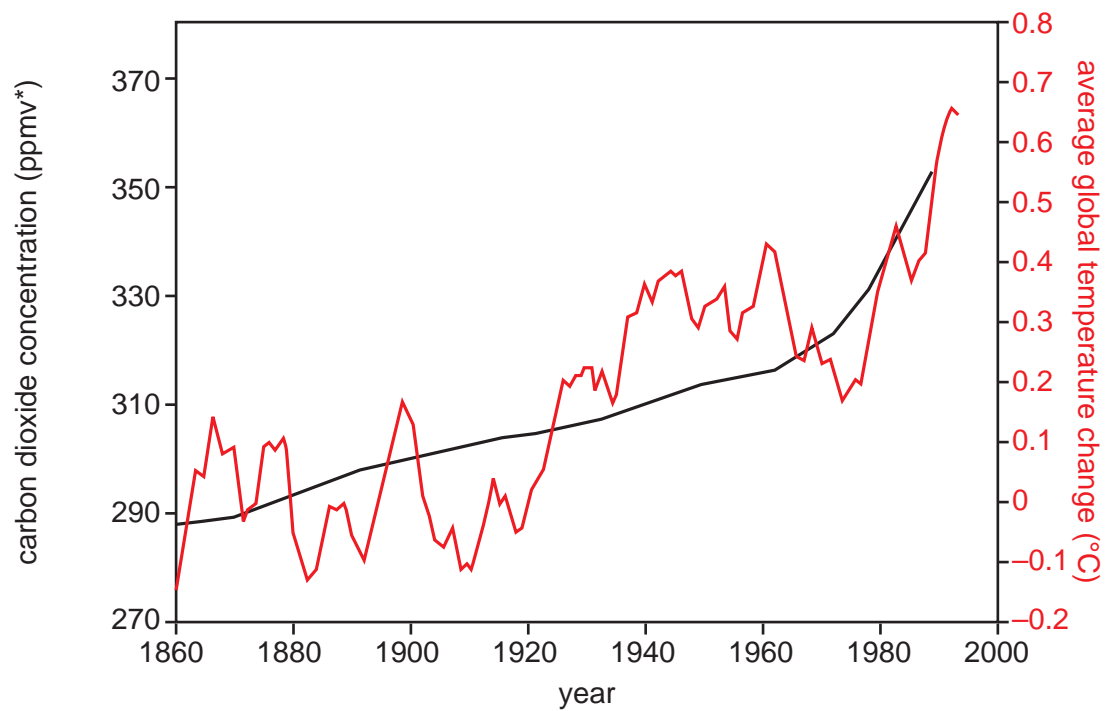


Fig. 2 for Question 2

Trends in carbon dioxide concentration and average global temperature change, 1860 to 1990



* parts per million by volume

4

Fig. 3 for Question 3

Two different mass movements

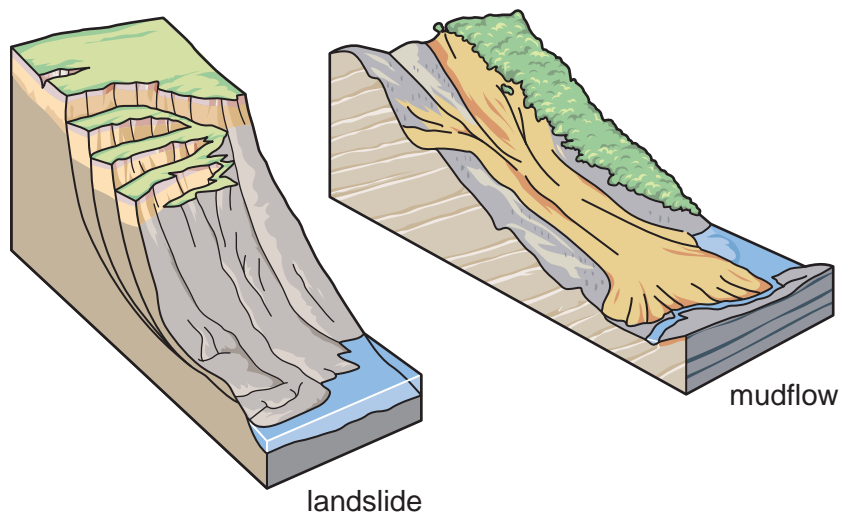


Table 1 for Question 4

**Total fertility rates* for the world and for India, a country in South Asia,
in 1970–74 and 2000–14 and predicted 2015–49**

	actual				predicted		
	1970–74	2000–04	2005–09	2010–14	2015–19	2020–24	2045–49
world	4.5	2.7	2.6	2.4	2.4	2.2	2.1
India	5.3	3.1	2.8	2.5	2.3	2.1	1.9

* 5-year averages

Fig. 4 for Question 5

Immigrants as a percentage of total population, by world region, in 1990, 2000 and 2010

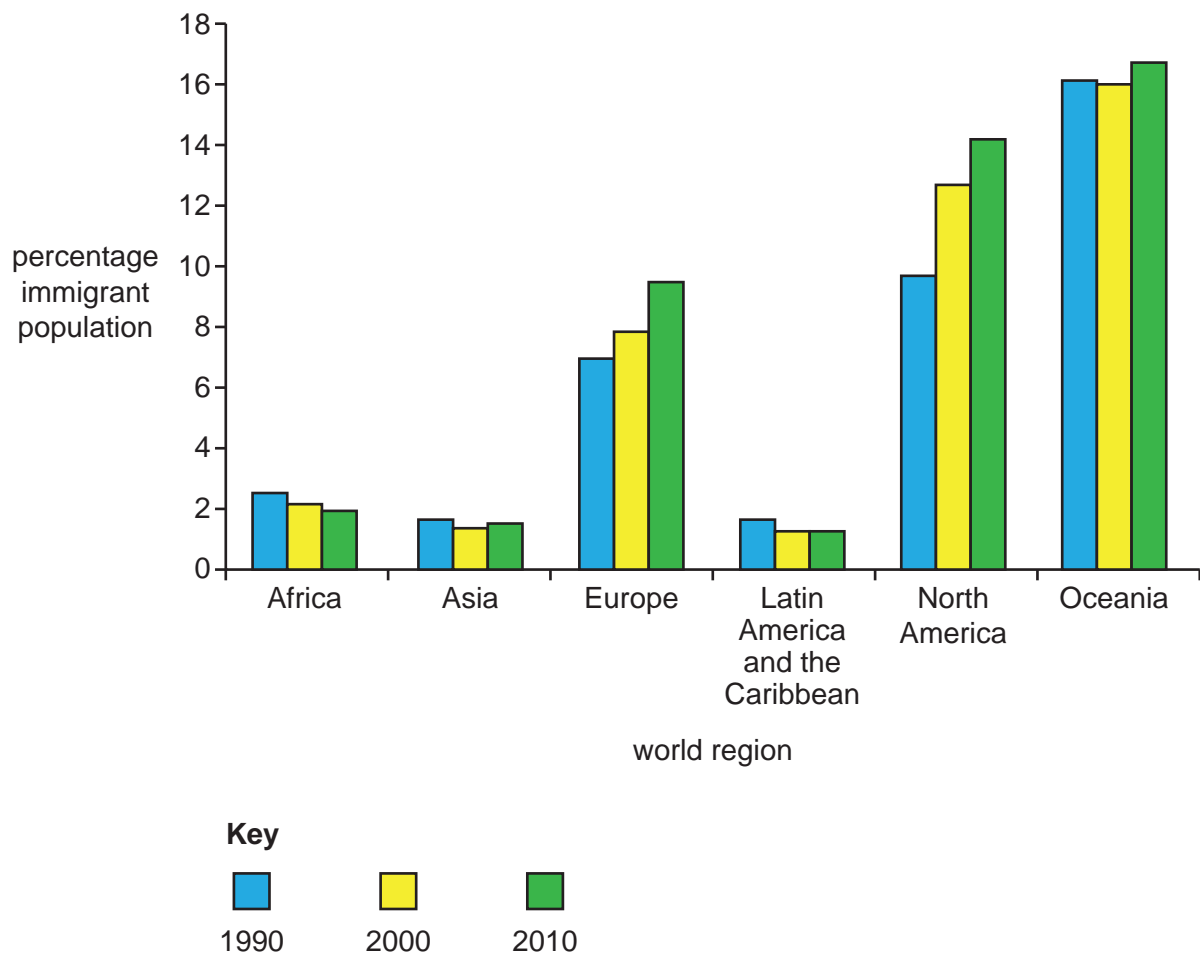
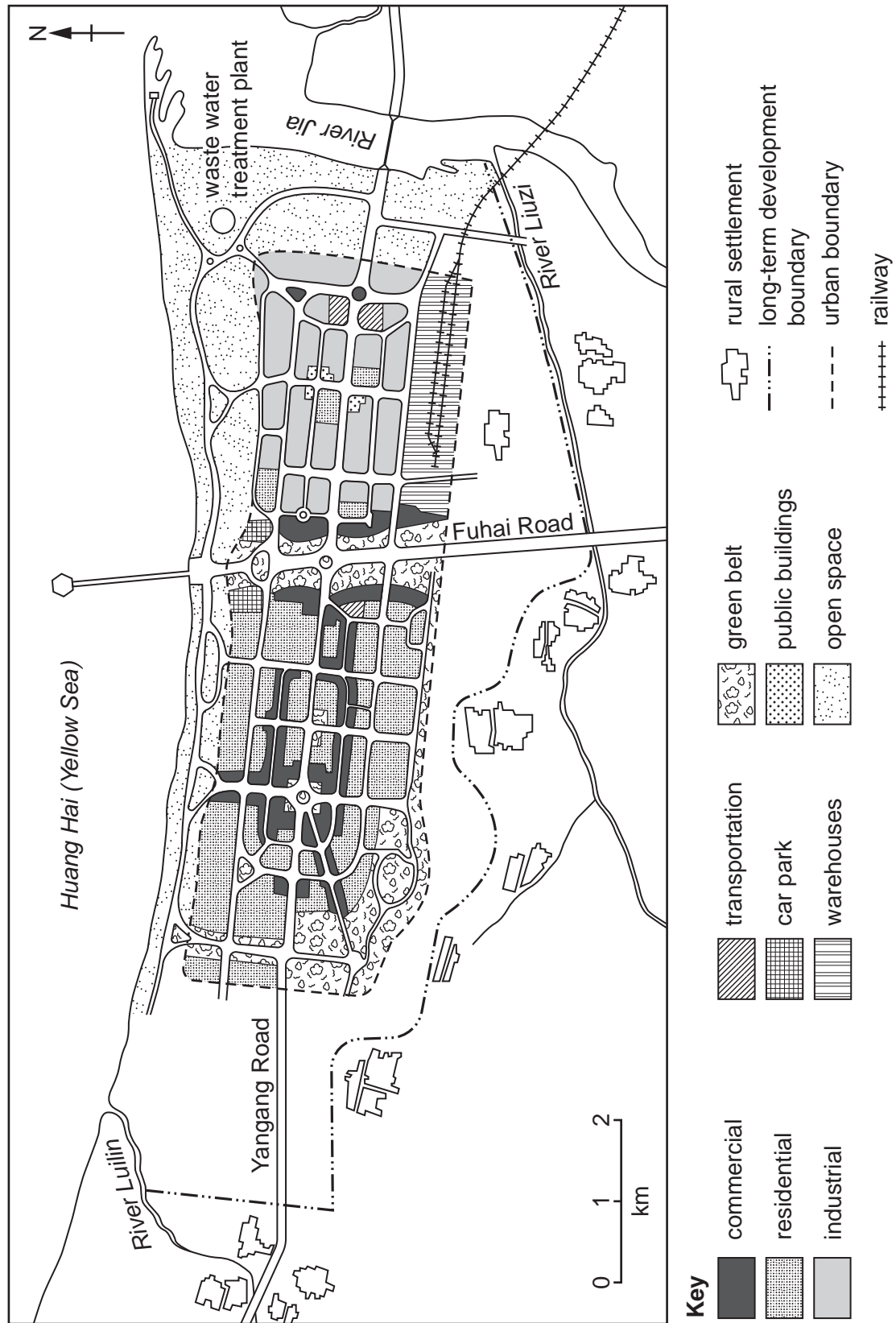


Fig. 5 for Question 6
Plan of Fulaishan Economic and Technical Development Zone (ETDZ), China



BLANK PAGE

Permission to reproduce items where third-party owned material protected by copyright is included has been sought and cleared where possible. Every reasonable effort has been made by the publisher (UCLES) to trace copyright holders, but if any items requiring clearance have unwittingly been included, the publisher will be pleased to make amends at the earliest possible opportunity.

To avoid the issue of disclosure of answer-related information to candidates, all copyright acknowledgements are reproduced online in the Cambridge International Examinations Copyright Acknowledgements Booklet. This is produced for each series of examinations and is freely available to download at www.cie.org.uk after the live examination series.

Cambridge International Examinations is part of the Cambridge Assessment Group. Cambridge Assessment is the brand name of University of Cambridge Local Examinations Syndicate (UCLES), which is itself a department of the University of Cambridge.